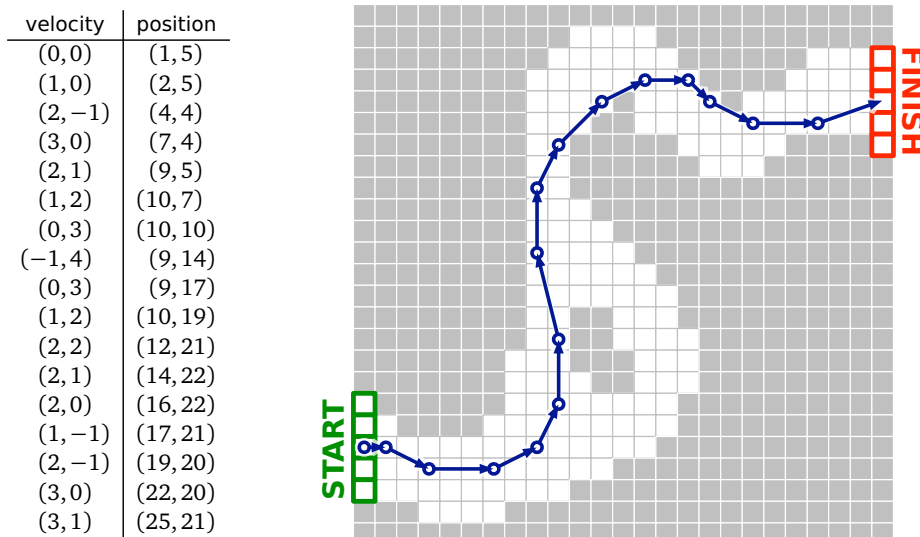


1. **Racetrack** (also known as *Graph Racers* and *Vector Rally*) is a two-player paper-and-pencil racing game that Jeff played on the bus in 5th grade.<sup>1</sup> The game is played with a track drawn on a sheet of graph paper. The players alternately choose a sequence of grid points that represent the motion of a car around the track, subject to certain constraints explained below.

Each car has a *position* and a *velocity*, both with integer  $x$ - and  $y$ -coordinates. A subset of grid squares is marked as the *starting area*, and another subset is marked as the *finishing area*. The initial position of each car is chosen by the player somewhere in the starting area; the initial velocity of each car is always  $(0, 0)$ . At each step, the player optionally increments or decrements either or both coordinates of the car's velocity; in other words, each component of the velocity can change by at most 1 in a single step. The car's new position is then determined by adding the new velocity to the car's previous position. The new position must be inside the track; otherwise, the car crashes and that player loses the race. The race ends when the first car reaches a position inside the finishing area.

Suppose the racetrack is represented by an  $n \times n$  array of bits, where each 0 bit represents a grid point inside the track, each 1 bit represents a grid point outside the track, the 'starting area' is the first column, and the 'finishing area' is the last column.

Describe and analyze an algorithm to find the minimum number of steps required to move a car from the starting area to the finishing area of a given racetrack.

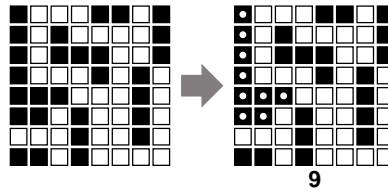


A 16-step Racetrack run, on a  $25 \times 25$  track. This is *not* the shortest run on this track.

<sup>1</sup>The actual game is a bit more complicated than the version described here. See <http://harmmade.com/vectorracer/> for an excellent online version.

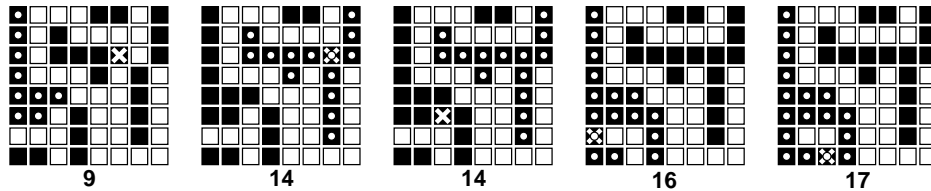
2. An *Euler tour* of a graph  $G$  is a walk that starts and ends at the same vertex and traverses every edge of  $G$  exactly once.
  - (a) Prove that a connected undirected graph  $G$  has an Euler tour if and only if every vertex in  $G$  has even degree.
  - (b) Describe and analyze an algorithm that constructs an Euler tour of a given graph  $G$ , or correctly reports that no such tour exists.

3. (a) Describe and analyze an algorithm to compute the size of the largest connected component of black pixels in a given  $n \times n$  bitmap  $B[1..n, 1..n]$ .  
 For example, given the bitmap below as input, your algorithm should return the number 9, because the largest connected black component (marked with white dots on the right) contains nine pixels.



- (b) Design and analyze an algorithm  $\text{BLACKEN}(i, j)$  that colors the pixel  $B[i, j]$  black and returns the size of the largest black component in the bitmap. For full credit, the *amortized* running time of your algorithm (starting with an all-white bitmap) must be as small as possible.

For example, at each step in the sequence below, we blacken the pixel marked with an X. The largest black component is marked with white dots; the number underneath shows the correct output of the  $\text{BLACKEN}$  algorithm.



- (c) What is the *worst-case* running time of your  $\text{BLACKEN}$  algorithm?